

## Statistics

### Practice set 7.1

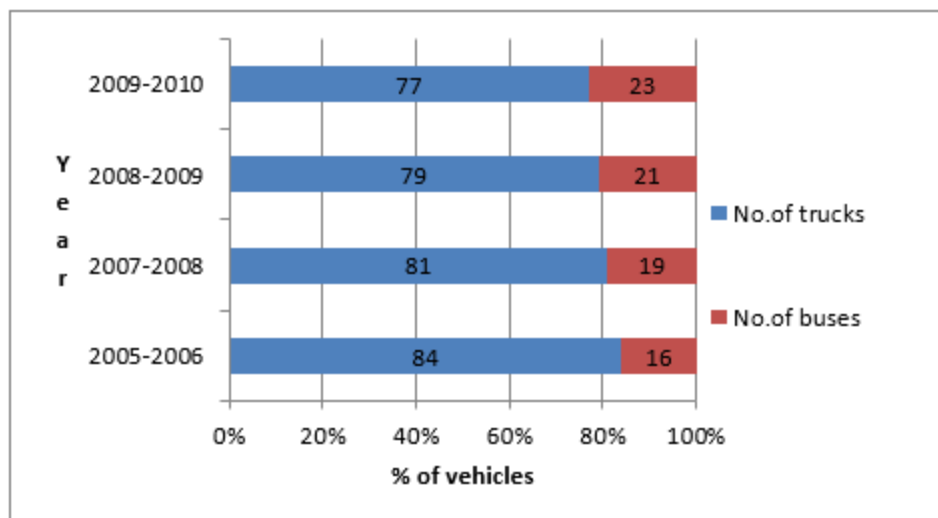
**Q. 1.** The following table shows the number of Buses and Trucks in nearest lakh units. Draw percentage bar-diagram. (Approximate the percentages to the nearest integer)

Year	No. of Trucks	No. of Buses
2005-2006	47	9
2007-2008	56	13
2008-2009	60	16
2009-2010	63	18

**Answer :** To draw percentage bar diagram, we find the % of buses and trucks with respect to total number of vehicles for each year.

Year	No. of Trucks	No. of Buses	% of trucks to total no. of vehicles (approx.)	% of buses to total no. of vehicles
2005-2006	47	9	$\frac{47}{56} \times 100 = 84$	16
2007-2008	56	13	$\frac{56}{69} \times 100 = 81$	19
2008-2009	60	16	$\frac{60}{76} \times 100 = 79$	21
2009-2010	63	18	$\frac{63}{81} \times 100 = 77$	23



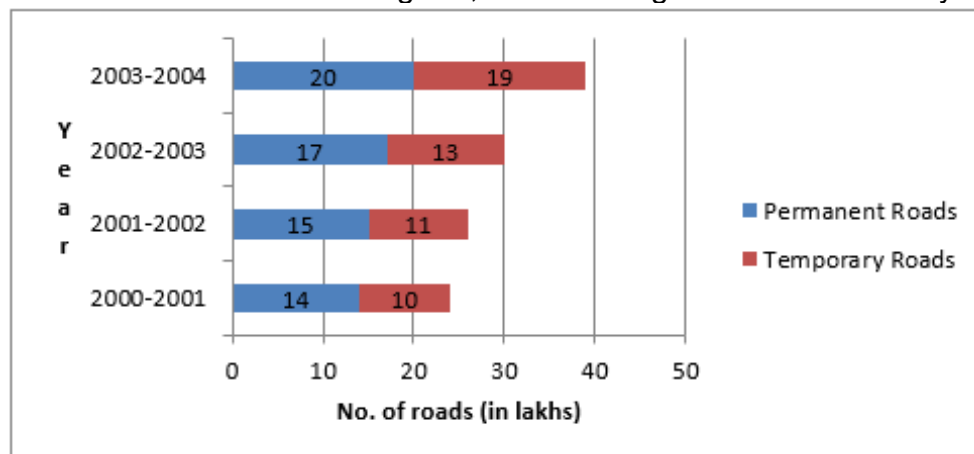


**Q. 2.** In the table given below, the information is given about roads. Using this draw sub-divided and percentage bar diagram (Approximate the percentages to the nearest integer)

Year	Permanent Roads (Lakh km.)	Temporary Roads (Lakh km.)
2000-2001	14	10
2001-2002	15	11
2003-2004	17	13
2007-2008	20	19

**Answer :** Sub divided bar diagram

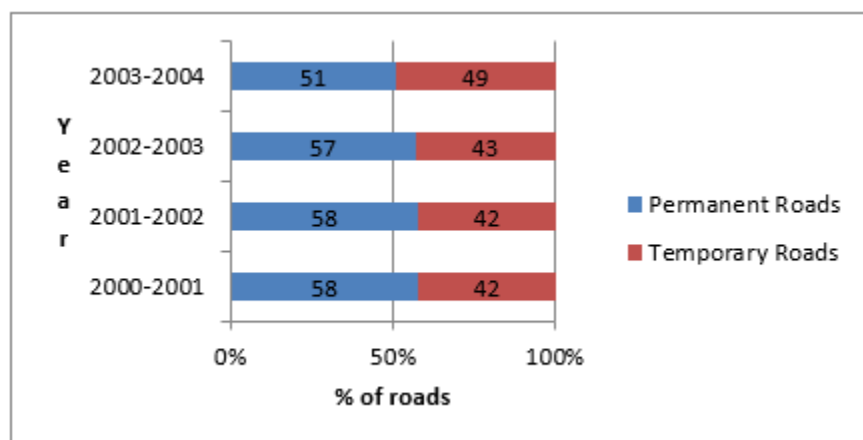
To draw sub divided bar diagram, we use the given table for each year.



### Percentage bar-diagram

To draw percentage bar diagram, we find the % of permanent and temporary roads with respect to total number of roads for each year.

Year	Permanent Roads	Temporary Roads	% of Permanent Roads to total no. of roads	% of Temporary Roads to total no. of roads
2000-2001	14	10	$\frac{14}{24} \times 100 = 58$	42
2001-2002	15	11	$\frac{15}{26} \times 100 = 58$	42
2002-2003	17	13	$\frac{17}{30} \times 100 = 57$	43
2003-2004	20	19	$\frac{20}{39} \times 100 = 51$	49



### Practice set 7.2

Q. 1. Classify following information as primary or secondary data.

- Information of attendance of every student collected by visiting every class in a school.
- The information of heights of students was gathered from school records and sent to the head office, as it was to be sent urgently.
- In the village Nandpur, the information collected from every house regarding students not attending school.



**iv. For science project, information of trees gathered by visiting a forest.**

**Answer : i.** Primary data, because the data is collected by the investigator himself by going in every class.

**ii.** Secondary data, because the data is collected by some other person and is being used by investigator.

**iii.** Primary data, because the data is collected by the investigator himself by visiting every house.

**iv.** Primary data, because the data is collected by the investigator himself by visiting forest.

### Practice set 7.3

**Q. 1. For class interval 20-25 write the lower-class limit and the upper-class limit.**

**Answer :** For class interval 20-25,

Lower class limit = 20

Upper class limit = 25

**Q. 2. Find the class-mark of the class 35-40.**

**Answer :** For class interval 35-40,

Lower class limit = 35

Upper class limit = 40

Now,

$$\text{class mark} = \frac{\text{lower limit} + \text{upper limit}}{2}$$

$$\Rightarrow \text{class mark} = \frac{35 + 40}{2}$$

$$= \frac{75}{2}$$

$$= 37.5$$

**Q. 3. If class mark is 10 and class width is 6 then find the class.**

**Answer :** We know that

Class size = upper limit – lower limit

$$\Rightarrow \text{Upper limit} - \text{lower limit} = 6 \dots\dots(1)$$

Also,

$$\text{classmark} = \frac{\text{lowerlimit} + \text{upperlimit}}{2}$$

$$\Rightarrow \text{Lower limit} + \text{upper limit} = 2 \times 10$$

$$\Rightarrow \text{Lower limit} + \text{upper limit} = 20 \dots\dots(2)$$

Adding (1) and (2)

$$\Rightarrow 2(\text{Upper limit}) = 26$$

$$\Rightarrow \text{Upper limit} = 13$$

And lower limit = 7

$$\Rightarrow \text{Class} = 7-13$$

**Q. 4 Complete the following table.**

Classes (age)	Tally marks	Frequency (No. of students)
12-13		<input type="text"/>
13-14		<input type="text"/>
14-15		<input type="text"/>
15-16		<input type="text"/>
		$N = \sum f = 35$

**Answer :**

Classes (age)	Tally marks	Frequency (No. of students)
12-13		5
13-14		14
14-15		13
15-16		4
		$N = \sum f = 35$

For class 14-15:

$$\text{Frequency} = 35 - (4 + 14 + 4)$$

$$= 35 - 22 = 13$$

**Q. 5.** In a 'tree plantation' project of a certain school there are 45 students of 'Harit Sena.' There cord of trees planted by each student is given below :

3, 5, 7, 6, 4, 3, 5, 4, 3, 5, 4, 7, 5, 3, 6, 6, 5, 3, 4, 5, 7, 3, 5, 6, 4, 4, 3, 5, 6, 6, 4, 3, 5, 7, 3, 4, 5, 7, 6, 4, 3, 5, 4, 4, 7.

Prepare a frequency distribution table of the data.

**Answer :** Arrange the data in ascending order.

3,3,3,3,3,3,3,3,3,3,4,4,4,4,4,4,4,4,4,4,4,5,5,5,5,5,5,5,5,5,5,5,6,6,6,6,6,6,7,7,7,7,7,7

No. of trees planted	Tally marks	Frequency(No. of students)
3		10
4		11
5		11
6		7
7		6
		Total=45

**Q. 6.** The value of  $\pi$  upto 50 decimal places is given below :

3.14159265358979323846264338327950288419716939937510

From this information prepare an ungrouped frequency distribution table of digits appearing after the decimal point.

**Answer :** From the given value we can prepare following table.

Digits	Tally marks	Frequency
0	II	2
1	III	5
2	III	5
3	III III	8
4	IIII	4
5	III	5
6	IIII	4
7	IIII	4
8	III	5
9	III II	7
		Total=50

**Q. 7. In the tables given below, class-mark and frequencies is given. Construct the frequency tables taking inclusive and exclusive classes.**

i.

Class mark	Frequency
5	3
15	9
25	15
35	13

ii.

Class mark	Frequency
22	6
24	7
26	13
28	4

**Answer :** i. Class width =  $15-5=10$

Classes(inclusive)	Frequency
0-10	3
11-20	9
21-30	15
31-40	13

Classes(exclusive)	Frequency
0-10	3
10-20	9
20-30	15
30-40	13

ii. Class width =  $24-22=2$

Classes(exclusive)	Frequency
21-23	6
23-25	7
25-27	13
27-29	4

**Q. 8.** In a school, 46 students of 9th standard, were told to measure the lengths of the pencils in their compass-boxes in centimeters. The data collected was as follows.

16, 15, 7, 4.5, 8.5, 5.5, 5, 6.5, 6, 10, 12, 13, 4.5, 4.9, 16, 11, 9.2, 7.3, 11.4, 12.7, 13.9, 16, 5.5, 9.9, 8.4, 11.4, 13.1, 15, 4.8, 10, 7.5, 8.5, 6.5, 7.2, 4.5, 5.7, 16, 5.7, 6.9, 8.9, 9.2, 10.2, 12.3, 13.7, 14.5, 10

By taking inclusive classes 0-5, 5-10, 10-15....Prepare a grouped frequency distribution table.

**Answer :** From the given values we can prepare following table.



Lengths of the pencils	Tally marks	Frequency
0-5		6
5-10		21
10-15		14
15-20		4
		Total = 45

**Q. 9.** In a village, the milk was collected from 50 milkmen at a collection center in liters as given below :

27, 75, 5, 99, 70, 12, 15, 20, 30, 35, 45, 80, 77, 90, 92, 72, 4, 33, 22, 15, 20, 28, 29, 14, 16, 20, 72, 81, 85, 10, 16, 9, 25, 23, 26, 46, 55, 56, 66, 67, 51, 57, 44, 43, 6, 65, 42, 36, 7, 35.

By taking suitable classes, prepare grouped frequency distribution table.

**Answer :** From the given values we can prepare following table.

Milk(in litres)	Tally Marks	Frequency
0-20		12
20-40		15
40-60		09
60-80		08
80-100		06

**Q. 10.** 38 people donated to an organisation working for differently abled persons. The amount in rupees were as follows:

101, 500, 401, 201, 301, 160, 210, 125, 175, 190, 450, 151, 101, 351, 251, 451, 151, 260, 360, 410, 150, 125, 161, 195, 351, 170, 225, 260, 290, 310, 360, 425, 420, 100, 105, 170, 250, 100.

i. By taking classes 100-149, 150-199, 200-249... prepare grouped frequency distribution table.

ii. From the table, find the number of people who donated rupees 350 or more.

**Answer :** i. From the given values we can prepare following table.

Amount(in rupees)	Tally marks	frequency
100-149	III II	07
150-199	III III	10
200-249	III	03
250-299	III	05
300-349	II	02
350-399	III	04
400-449	III	04
450-499	III	03

ii. The number of people who donated rupees 350 or more  $= 4 + 4 + 3 = 11$

### Practice set 7.4

Q. 1. Complete the following cumulative frequency table:

Class (Height in cm)	Frequency (No. of students)	Less than type frequency
150-153	05	05
153-156	07	$05 + \square = \square$
156-159	15	$\square + 15 = \square$
159-162	10	$\square + \square = 37$
162-165	05	$37 + 5 = 42$
165-168	03	$\square + \square = 45$
	Total N = 45	

Answer :

Class (Height in cm)	Frequency (No. of students)	Less than type frequency
150-153	05	05
153-156	07	$05 + 07 = 12$
156-159	15	$12 + 15 = 27$
159-162	10	$27 + 10 = 37$
162-165	05	$37 + 05 = 42$
165-168	03	$42 + 03 = 45$
	Total N = 45	

**Q. 2. Complete the following Cumulative Frequency Table :**

Class (Monthly income in Rs.)	Frequency (No. of individuals)	More than or equal to type cumulative frequency
1000-5000	45	.....
5000-10000	19	.....
10000-15000	16	.....
15000-20000	02	.....
20000-25000	05	.....
	Total N = 87	

**Answer :**

Class (Monthly income in Rs.)	Frequency (No. of individuals)	More than or equal to type cumulative frequency
1000-5000	45	87
5000-10000	19	$87 - 45 = 42$
10000-15000	16	$42 - 19 = 23$
15000-20000	02	$23 - 16 = 07$
20000-25000	05	$07 - 02 = 05$
	Total N = 87	

**Q. 3.** The data is given for 62 students in a certain class regarding their mathematics marks out of 100. Take the classes 0-10, 10-20.. and prepare frequency distribution table and cumulative frequency table more than or equal to type.

55, 60, 81, 90, 45, 65, 45, 52, 30, 85, 20, 10, 75, 95, 09, 20, 25, 39, 45, 50, 78, 70, 46, 64, 42, 58, 31, 82, 27, 11, 78, 97, 07, 22, 27, 36, 35, 40, 75, 80, 47, 69, 48, 59, 32, 83, 23, 17, 77, 45, 05, 23, 37, 38, 35, 25, 46, 57, 68, 45, 47, 49.

From the prepared table, answer the following questions:

- i. How many students obtained marks 40 or above 40?
- ii. How many students obtained marks 90 or above 90?
- iii. How many students obtained marks 60 or above 60?
- iv. What is the cumulative frequency of equal to or more than type of the class 0-10?

**Answer :** From the given value we can prepare following table.

Marks	Frequency	More than type cumulative frequency
0-10	03	62
10-20	03	59
20-30	09	56
30-40	09	47
40-50	13	38
50-60	06	25
60-70	05	19
70-80	06	14
80-90	05	08
90-100	03	03

**Ans. i.** 38

**ii.** 3

**iii.** 19

iv. 62

**Q. 4.** Using the data in example (3) above, prepare less than type cumulative frequency table and answer the following questions.

- i. How many students obtained less than 40 marks?
- ii. How many students obtained less than 10 marks?
- iii. How many students obtained less than 60 marks?
- iv. Find the cumulative frequency of the class 50-60.

**Answer :**

Marks	Frequency	Less than type cumulative frequency
0-10	03	03
10-20	03	06
20-30	09	15
30-40	09	24
40-50	13	37
50-60	06	43
60-70	05	48
70-80	06	54
80-90	05	59
90-100	03	62

**Ans. i.** 24

**ii.** 03

**iii.** 43

**iv.** 43

### Practice set 7.5

**Q. 1.** Yield of soyabean per acre in quintal in Mukund's field for 7 years was 10, 7, 5, 3, 9, 6, 9. Find the mean of yield per acre.



**Answer :**

$$\text{Mean} = \frac{\text{sum of observations}}{\text{Total number of observations}}$$

$$\Rightarrow \text{Mean} = \frac{10 + 7 + 5 + 3 + 9 + 6 + 9}{7}$$

$$= \frac{49}{7}$$

$$= 7$$

**Q. 2. Find the median of the observations, 59, 75, 68, 70, 74, 75, 80.**

**Answer :** Given: 59, 75, 68, 70, 74, 75, 80.

Here,  $n = 7$

On arranging the data in ascending order,

59, 68, 70, 74, 75, 75, 80

When the number of terms of odd, the median is given as:

$$\text{Median} = \frac{n + 1}{2} \text{th term}$$

$$\Rightarrow \text{Median} = \frac{7 + 1}{2} = \frac{8}{2}$$

$$\Rightarrow \text{Median} = 4^{\text{th}} \text{ term}$$

$$\therefore \text{Median} = 74$$

**Q. 3. The marks (out of 100) obtained by 7 students in Mathematics' examination are given below. Find the mode for these marks.**

**99, 100, 95, 100, 100, 60, 90**

**Answer :** Mode is the maximum occurring observation.

Arrange the data in ascending order.

60, 90, 95, 99, 100, 100, 100

100 is occurring thrice, mode is 100.

**Q. 4. The monthly salaries in rupees of 30 workers in a factory are given below.**

5000, 7000, 3000, 4000, 4000, 3000, 3000, 3000, 8000, 4000,  
4000, 9000, 3000, 5000, 5000, 4000, 4000, 3000, 5000, 5000,  
6000, 8000, 3000, 3000, 6000, 7000, 7000, 6000, 6000, 4000

**From the above data find the mean of monthly salary.**

**Answer :**

$x_i$	$f_i$	$x_i \times f_i$
3000	8	24000
4000	7	28000
5000	5	25000
6000	4	24000
7000	3	21000
8000	2	16000
9000	1	9000
<b>Total</b>	<b>30</b>	<b>147000</b>

$$\text{Mean} = \frac{\sum fx}{\sum f} = \frac{147000}{30} = 4900$$

**Q. 5. In a basket there are 10 tomatoes. The weight of each of these tomatoes in grams is as follows 60, 70, 90, 95, 50, 65, 70, 80, 85, 95.**

**Find the median of the weights of tomatoes.**

**Answer :** Here,  $n=10$

$$\text{Median} = \text{average of } \left( \frac{n}{2} \text{th term and } \frac{n}{2} + 1 \text{th term} \right)$$

So median = Mean of fifth and sixth observations.

Arrange data in ascending order,

50, 60, 65, 70, 70, 80, 85, 90, 95, 95

$$\Rightarrow \text{Median} = \frac{70 + 80}{2} = 75$$

**Q. 6. A hockey player has scored following number of goals in 9 matches.**

**5, 4, 0, 2, 2, 4, 4, 3, 3. Find the mean, median and mode of the data.**

**Answer :** Arrange data in ascending order,

0, 2, 2, 3, 3, 4, 4, 4, 5

Here,  $N = 9$

$$\text{Mean} = \frac{\text{sum of observations}}{\text{Total number of observations}}$$

$$\Rightarrow \text{Mean} = \frac{0 + 2 + 2 + 3 + 3 + 4 + 4 + 4 + 5}{9}$$

$$= \frac{27}{9}$$

$$= 3$$

$$\text{Median} = \frac{n + 1}{2} \text{th term}$$

$$\text{Median} = 5^{\text{th}} \text{ observation} = 3$$

Mode is the maximum occurring observation.

$$\text{Mode} = 4$$

**Q. 7. The calculated mean of 50 observations was 80. It was later discovered that observation 19 was recorded by mistake as**

**91. What was the correct mean?**

**Answer :** We know that

$$\text{Mean} = \frac{\text{sum of observations}}{\text{Total number of observations}}$$

$$\Rightarrow \text{Sum of observations} = \text{Mean} \times \text{Total number of observations}$$



Given mean of 50 observations = 80

⇒ Sum of 50 observations =  $80 \times 50$

⇒ Sum of 50 observations = 4000

For correct mean, we will subtract 91 and add 19 to the sum.

$$\Rightarrow \text{Correct mean} = \frac{4000 - 91 + 19}{50} = \frac{3928}{50} = 78.56$$

**Q. 8. Following 10 observations are arranged in ascending order as follows.**

**2, 3, 5, 9,  $x + 1$ ,  $x + 3$ , 14, 16, 19, 20**

**If the median of the data is 11, find the value of  $x$ .**

**Answer :** Here,  $n=10$

Median = average of  $\left(\frac{n}{2}\right)^{\text{th}}$  term and  $\left(\frac{n}{2} + 1\right)^{\text{th}}$  term

So median = Mean of fifth and sixth observations.

$$\Rightarrow \text{Median} = \frac{x + 1 + x + 3}{2} = 11$$

$$\Rightarrow 2x + 4 = 22$$

$$\Rightarrow x = 9$$

**Q. 9. The mean of 35 observations is 20, out of which mean of first 18 observations is 15 and mean of last 18 observation is 25. Find the 18th observation.**

**Answer :** We know that

$$\text{Mean} = \frac{\text{sum of observations}}{\text{Total number of observations}}$$

⇒ Sum of observations = Mean  $\times$  Total number of observations

$$\text{Sum of 35 observations} = 20 \times 35 = 700$$

$$\text{Sum of first 18 observations} = 15 \times 18 = 270$$

Sum of last 18 observations =  $25 \times 18 = 450$

While adding first 18 observations and last 18 observations, we add 18<sup>th</sup> observation twice so,

18<sup>th</sup> observation = Sum of first 18 observations + Sum of last 18 observations - Sum of 35 observations

$\Rightarrow$  18<sup>th</sup> observation =  $270 + 450 - 700 = 20$

**Q. 10. The mean of 5 observations is 50. One of the observations was removed from the data, hence the mean became 45. Find the observation which was removed.**

**Answer :** We know that

$$\text{Mean} = \frac{\text{sum of observations}}{\text{Total number of observations}}$$

$\Rightarrow$  Sum of observations = Mean  $\times$  Total number of observations

Sum of 5 observations =  $50 \times 5 = 250$

Sum after removing one observation =  $4 \times 45 = 180$

$\Rightarrow$  Removed observation = sum of 5 observations – Sum after removing one observation

$\Rightarrow$  Removed observation =  $250 - 180 = 70$

**Q. 11. There are 40 students in a class, out of them 15 are boys. The mean of marks obtained by boys is 33 and that for girls is 35. Find out the mean of all students in the class.**

**Answer :** We know that

$$\text{Mean} = \frac{\text{sum of observations}}{\text{Total number of observations}}$$

$\Rightarrow$  Sum of observations = Mean  $\times$  Total number of observations

Mean of marks obtained by 15 boys = 33

$\Rightarrow$  Total marks obtained by boys =  $33 \times 15 = 495$

Number of girls =  $40 - 15 = 25$

And Mean of marks obtained by 25 girls = 35

⇒ Total marks obtained by girls =  $35 \times 25 = 875$

Total marks obtained by class = Total marks obtained by boys and girls =  $495 + 875 = 1370$

$$\Rightarrow \text{Mean of all students} = \frac{1370}{40} = 34.25$$

**Q. 12. The weights of 10 students (in kg) are given below :**

**40, 35, 42, 43, 37, 35, 37, 37, 42, 37. Find the mode of the data.**

**Answer :** Mode is the maximum occurring observation.

Arrange the data in ascending order.

35, 35, 37, 37, 37, 37, 40, 42, 42, 43

37 occurs four times.

Mode = 37kg

**Q. 13. In the following table, the information is given about the number of families and the siblings in the families less than 14 years of age. Find the mode of the data.**

No. of siblings	1	2	3	4
Families	15	25	5	5

**Answer :** From the data, we observe that 25 families have 2 siblings which is the highest so mode is 2 siblings.

**Q. 14. Find the mode of the following data.**

Marks	35	36	37	38	39	40
No. of students	09	07	09	04	04	02

**Answer :** From the data, we observe that 9 students have got 35 and 37 marks which is the highest so mode is 35 and 37 marks.

### Problem set 7

**Q. 1 A. Write the correct alternative answer for each of the following questions.**

**Which of the following data is not primary?**

- A. By visiting a certain class, gathering information about attendance of students.**
- B. By actual visit to homes, to find number of family members.**
- C. To get information regarding plantation of soyabean done by each farmer from the village Talathi.**
- D. Review the cleanliness status of canals by actually visiting them.**

**Answer :** In option C, investigator is not collecting the data himself but using the data collected by the farmers.

**Q. 1 B. What is the upper-class limit for the class 25-35?**

- A. 25**
- B. 35**
- C. 60**
- D. 30**

**Answer :** In the class 25-35, 35 is the upper-class limit.

**Q. 1 C. What is the class-mark of class 25-35?**

- A. 25**
- B. 35**
- C. 60**
- D. 30**

**Answer :** Here, lower limit = 25 and upper limit = 35

$$\text{classmark} = \frac{\text{lowerlimit} + \text{upperlimit}}{2}$$

$$\Rightarrow \text{classmark} = \frac{25 + 35}{2} = \frac{60}{2} = 30$$



**Q. 1 D.** If the classes are 0-10, 10-20, 20-30... then in which class should the observation 10 be included?

- A. 0-10
- B. 10-20
- C. 0-10 and 10-20 in these 2 classes
- D. 20-30

**Answer :** These classes are exclusive in nature which means the classes are continuous. The class 0-10 include 0 and all the numbers less than 10 while class 10 – 20 include 10 and all the numbers less than 20 and so on.

**Q. 1 E.** If  $\bar{x}$  is the mean of  $x_1, x_2, \dots, x_n$  and  $\bar{y}$  is the mean of  $y_1, y_2, \dots, y_n$  and  $\bar{z}$  is the mean of  $x_1, x_2, \dots, x_n, y_1, y_2, \dots, y_n$  then  $\bar{z} = ?$

A.  $\frac{\bar{x} + \bar{y}}{2}$

B.  $\bar{x} + \bar{y}$

C.  $\frac{\bar{x} + \bar{y}}{n}$

D.  $\frac{\bar{x} + \bar{y}}{2n}$

**Answer :**

$$\bar{x} = \frac{x_1 + \dots + x_n}{n}$$

$$\bar{y} = \frac{y_1 + \dots + y_n}{n}$$

$$\bar{z} = \frac{x_1 + \dots + x_n + y_1 + \dots + y_n}{2n}$$

$$\Rightarrow \bar{z} = \frac{\bar{x} + \bar{y}}{2}$$

**Q. 1 F. The mean of five numbers is 80, out of which mean of 4 numbers is 46, find the 5th number :**

- A. 4
- B. 20
- C. 434
- D. 66

**Answer :** We know that

$$\text{Mean} = \frac{\text{sum of observations}}{\text{Total number of observations}}$$

$\Rightarrow$  Sum of observations = Mean  $\times$  Total number of observations

Given mean of 4 numbers = 46

$\Rightarrow$  Sum of four numbers =  $4 \times 46 = 184$

Also, mean of 5 numbers = 80

$$\Rightarrow \frac{184 + \text{fifth number}}{5} = 80$$

$\Rightarrow$  Fifth number =  $80 \times 5 - 184 = 400 - 184 = 216$

**Q. 1 G**

**Mean of 100 observations is 40. The 9th observation is 30. If this is replaced by 70 keeping all other observations same, find the new mean.**

- A. 40.6
- B. 40.4
- C. 40.3
- D. 40.7

**Answer :** We know that

$$\text{Mean} = \frac{\text{sum of observations}}{\text{Total number of observations}}$$

$\Rightarrow$  Sum of observations = Mean  $\times$  Total number of observations

$\Rightarrow$  Sum of 100 observations =  $40 \times 100 = 4000$



or new mean, we will subtract 30 and add 70 to the sum.

$$\Rightarrow \text{New mean} = \frac{4000 - 30 + 70}{100} = \frac{4040}{100} = 40.4$$

**Q. 1 H. What is the mode of 19, 19, 15, 20, 25, 15, 20, 15?**

- A. 15
- B. 20
- C. 19
- D. 25

**Answer :** Mode is the most frequently occurring observation. On arranging above data in ascending order, we get: 15, 15, 15, 19, 19, 20, 20, 25. Hence, 15 is the mode as it has the highest frequency( 3 times)

**Q. 1 I. What is the median of 7, 10, 7, 5, 9, 10?**

- A. 7
- B. 9
- C. 8
- D. 10

**Answer :** Here,  $n=6$

Median = average of  $\left(\frac{n}{2}\text{th term and } \frac{n}{2} + 1\text{th term}\right)$

So median = Mean of third and fourth observations.

On arranging above data in ascending order, we get: 5, 7, 7, 9, 10, 10

$\Rightarrow 3^{\text{rd}}$  term = 7 and  $4^{\text{th}}$  term = 9

$$\Rightarrow \text{Median} = \frac{7 + 9}{2} = 8$$

**Q. 1 J. From following table, what is the cumulative frequency of less than type for the class 30-40?**

Class	0-10	10-20	20-30	30-40	40-50
Frequency	7	3	12	13	2

- A. 13



- B. 15
- C. 35
- D. 22

**Answer :** Cumulative Frequency of less than type of the 30-40= sum of the frequencies of all the classes upto 30-40

⇒ Required cumulative frequency =7 + 3 + 12 + 13=35

**Q. 2. The mean salary of 20 workers is Rs.10, 250. If the salary of office superintendent is added, the mean will increase by Rs.750. Find the salary of the office superintendent.**

**Answer :**

$$\text{Mean} = \frac{\text{sum of observations}}{\text{Total number of observations}}$$

⇒ Sum of salary of 20 workers= 20×10250 ...(1)

And Mean increases by 750 when salary of superintendent is also added to it.

$$\Rightarrow \frac{\text{Salary of superintendent} + 20 \times 10250}{21} = 10250 + 750$$

⇒ Salary of superintendent + 20×10250 = 11000 × 21

⇒ Salary of superintendent =231000 - 205000

⇒ Salary of superintendent =26000

**Q. 3. The mean of nine numbers is 77. If one more number is added to it than the mean increases by 5. Find the number added in the data.**

**Answer :** We know that

$$\text{Mean} = \frac{\text{sum of observations}}{\text{Total number of observations}}$$

⇒ Sum of observations = Mean × Total number of observations

⇒ Sum of 9 numbers = 9×77 ..(1)

And Mean increases by 5 when one more number is also added to it.



$$\Rightarrow \frac{\text{New number} + 9 \times 77}{10} = 77 + 5$$

$$\Rightarrow \text{New number} + 9 \times 77 = 82 \times 5$$

$$\Rightarrow \text{New number} = 820 - 693 = 127$$

**Q. 4. The monthly maximum temperature of a city is given in degree celcius in the following data. By taking suitable classes, prepare the grouped frequency distribution table**

29.2, 29.0, 28.1, 28.5, 32.9, 29.2, 34.2, 36.8, 32.0, 31.0,  
30.5, 30.0, 33, 32.5, 35.5, 34.0, 32.9, 31.5, 30.3, 31.4,  
30.3, 34.7, 35.0, 32.5, 33.5, 29.0, 29.5, 29.9, 33.2, 30.2

From the table, answer the following questions.

- For how many days the maximum temperature was less than 34°C?
- For how many days the maximum temperature was 34°C or more than 34°C?

**Answer :**

Maximum temperature(°C)	Frequency
28-30	8
30-32	8
32-34	8
34-36	5
36-38	1

(i) Less than 34°C = 8 + 8 + 8 = 24

(ii) Equal to or more than 34°C = 5 + 1 = 6

**Q. 5. If the mean of the following data is 20.2, then find the value of p.**

$x_i$	10	15	20	25	30
$f_i$	6	8	$p$	10	6

**Answer :**

$x_i$	$f_i$	$x_i \times f_i$
10	6	60
15	8	120
20	P	20p
25	10	250
30	6	180
Total	30 + p	610 + 20p

$$\text{Mean} = \frac{\sum fx}{\sum f} = \frac{610 + 20p}{30 + p}$$

$$\Rightarrow \frac{610 + 20p}{30 + p} = 20.2$$

$$\Rightarrow 606 + 20.2p = 610 + 20p$$

$$\Rightarrow 0.2p = 4$$

$$\Rightarrow p = 20$$

**Q. 7.** By using data in example (6), and taking classes 30-40, 40-50... prepare equal to or more than type cumulative frequency table and answer the following questions based on it.

- How many students have scored marks 70 or more than 70?
- How many students have scored marks 30 or more than 30?

**Answer :**

Marks	Frequency	More than type cumulative frequency
30-40	14	68
40-50	20	54
50-60	11	34
60-70	12	23
70-80	9	11
80-90	2	2

i. 11

ii. 68

**Q. 8.** There are 10 observations arranged in ascending order as given below.

**45,47,50,52, x, x + 2, 60,62,63,74.** The median of these observations is 53.  
Find the value of x. Also find the mean and the mode of the data.

**Answer :** Here,  $n=10$

Median = average of  $\left(\frac{n}{2}\text{th term and } \frac{n}{2} + 1\text{th term}\right)$

So median = Mean of fifth and sixth observations.

5<sup>th</sup> term = x and 6<sup>th</sup> term = x + 2

$$\Rightarrow \frac{x + x + 2}{2} = 53$$

$$\Rightarrow 2x = 106 - 2$$

$$\Rightarrow x = 52$$

$$\text{Mean} = \frac{\text{sum of observations}}{\text{Total number of observations}}$$

$$\Rightarrow \text{Mean} = \frac{45 + 47 + 50 + 52 + 52 + 54 + 60 + 62 + 63 + 74}{10}$$

$$\Rightarrow \text{Mean} = \frac{559}{10} = 55.9$$

Mode is the most frequently occurring observation. Here 52 appears twice.

So, mode = 52.